


### 320. A Loe ja vasta küsimustele.

Tädi Anni kanad munesid 90 muna.

Tädi ladus munad võrdset üheksasse karpi.



*Mitu muna kanad munesid?*

.....



*Mitmeks võrdseks osaks tädi munad jagas?*

.....

*Mitu muna mahtus igasse karpi?*

.....

### B Lahenda ülesanne. Täienda vastust.




..... : ..... = .....

Igas karbis oli ..... muna.


### C Selgita, mis on jagamine.

*Sama moodi saab tegutseda erinevaid esemeid kasutades.*

### 321. Jaota võrdset.




$$18 : 9 = \dots\dots$$




$$27 : 9 = \dots\dots$$



$$9 : 9 = \dots\dots$$




$$36 : 9 = \dots\dots$$



$$45 : 9 = \dots\dots$$



$$63 : 9 = \dots\dots$$



$$54 : 9 = \dots\dots$$



$$81 : 9 = \dots\dots$$



$$72 : 9 = \dots\dots$$



$$90 : 9 = \dots\dots$$

### 322. Lahenda ülesanne.











Tristanil oli 27 eurot. Ta sai selle eest osta üheksa suurt šokolaadi-tahvlit. Kui palju maksis üks suur šokolaadi-tahvel?

### 323. Lahenda ülesanne.

90 krüsanteemi-potti viidi lille-kauplustesse.  
Iga kauplus sai 9 potilille. Mitmesse poodi  
krüsanteeme viidi?



### 324. Arvuta.

	$9 : 9 =$
	$18 : 9 =$
	$27 : 9 =$
	$36 : 9 =$
	$45 : 9 =$
	$54 : 9 =$
	$63 : 9 =$
	$72 : 9 =$
	$81 : 9 =$
	$90 : 9 =$