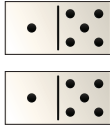
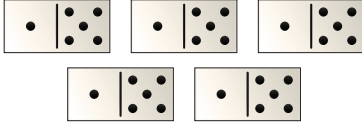

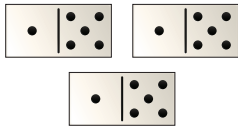
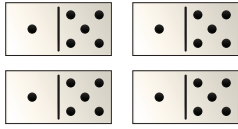


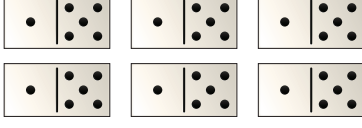




181. Ühenda sobivad avaldised pildiga. Arvuta.

$6 + 6 =$		$1 \cdot 6 =$
6		$2 \cdot 6 =$
$6 + 6 + 6 + 6 + 6 =$		$3 \cdot 6 =$
$6 + 6 + 6 + 6 =$		$4 \cdot 6 =$
$6 + 6 + 6 =$		$5 \cdot 6 =$
$6 + 6 + 6 + 6 + 6 + 6 + 6 =$		$6 \cdot 6 =$
$6 + 6 + 6 + 6 + 6 + 6 + 6 =$		$7 \cdot 6 =$
$6 + 6 + 6 + 6 + 6 + 6 + 6 + 6 + 6 =$		$8 \cdot 6 =$
$6 + 6 + 6 + 6 + 6 + 6 + 6 + 6 + 6 =$		$9 \cdot 6 =$
$6 + 6 + 6 + 6 + 6 + 6 + 6 + 6 + 6 + 6 =$		$10 \cdot 6 =$

182. Asenda võrdsete liidetavate liitmine korrutamisega.

$6 + 6 + 6 = \boxed{} \boxed{} \cdot \boxed{} \boxed{} = \boxed{} \boxed{}$

$6 + 6 + 6 + 6 + 6 + 6 = \boxed{} \boxed{} \cdot \boxed{} \boxed{} = \boxed{} \boxed{}$

$6 + 6 = \boxed{} \boxed{} \cdot \boxed{} \boxed{} = \boxed{} \boxed{}$

$6 + 6 + 6 + 6 + 6 = \boxed{} \boxed{} \cdot \boxed{} \boxed{} = \boxed{} \boxed{}$

$6 + 6 + 6 + 6 = \boxed{} \boxed{} \cdot \boxed{} \boxed{} = \boxed{} \boxed{}$

$6 + 6 + 6 + 6 + 6 + 6 + 6 + 6 + 6 = \boxed{} \boxed{} \cdot \boxed{} \boxed{} = \boxed{} \boxed{}$

$6 + 6 + 6 + 6 + 6 + 6 + 6 + 6 = \boxed{} \boxed{} \cdot \boxed{} \boxed{} = \boxed{} \boxed{}$

$6 + 6 + 6 + 6 + 6 + 6 + 6 = \boxed{} \boxed{} \cdot \boxed{} \boxed{} = \boxed{} \boxed{}$

$6 + 6 + 6 + 6 + 6 + 6 + 6 + 6 + 6 + 6 = \boxed{} \boxed{} \cdot \boxed{} \boxed{} = \boxed{} \boxed{}$

142. Lahenda ülesanded kahel viisil.




Liitmine

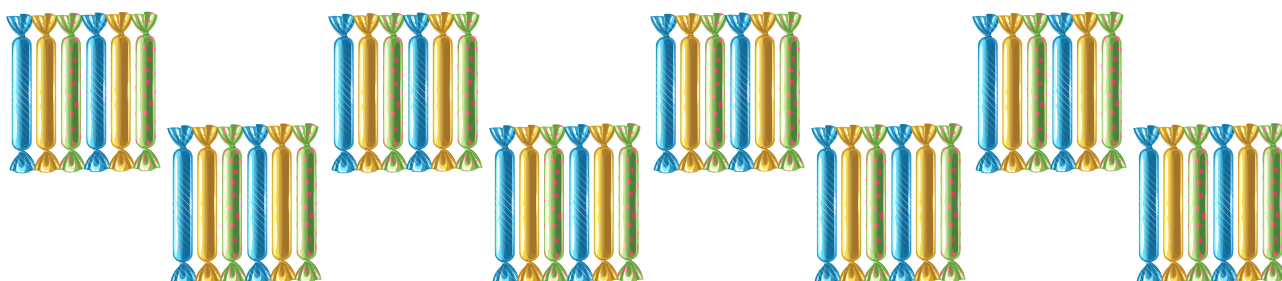
$6 + 6 + 6 = \boxed{} \boxed{} \boxed{} \boxed{} \boxed{} \boxed{} \boxed{} \boxed{} \boxed{} \boxed{}$

Korrutamine

$3 \cdot 6 = \boxed{} \boxed{} \boxed{} \boxed{} \boxed{} \boxed{} \boxed{} \boxed{} \boxed{} \boxed{}$



Liitmine															
Korrutamine															



Liitmine															
Korrutamine															



Liitmine															
Korrutamine															

184. Asenda korrutamine võrdsete liidetavate liitmisega.

$3 \cdot 6 =$

$2 \cdot 6 =$

$5 \cdot 6 =$

$1 \cdot 6 =$

$7 \cdot 6 =$

$4 \cdot 6 =$

$10 \cdot 6 =$

$6 \cdot 6 =$


$9 \cdot 6 =$

$8 \cdot 6 =$

185. Lahenda ülesanded kahel viisil.



Korrutamine															
Liitmine															



Korrutamine															
Liitmine															




Korrutamine

--	--	--	--	--	--	--	--	--	--	--	--	--	--	--	--	--	--	--	--

Liitmine

--	--	--	--	--	--	--	--	--	--	--	--	--	--	--	--	--	--	--	--

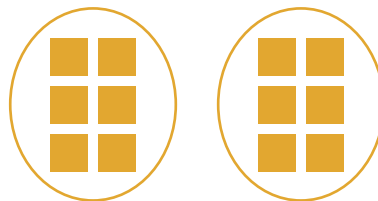


Korrutamine

--	--	--	--	--	--	--	--	--	--	--	--	--	--	--	--	--	--	--	--

Liitmine

--	--	--	--	--	--	--	--	--	--	--	--	--	--	--	--	--	--	--	--

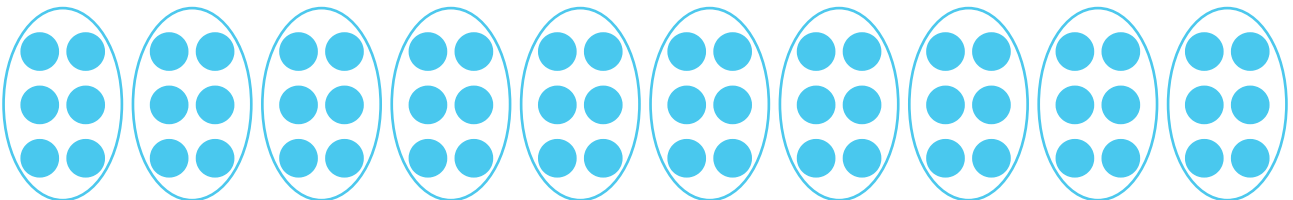


Korrutamine

--	--	--	--	--	--	--	--	--	--	--	--	--	--	--	--	--	--	--	--

Liitmine

--	--	--	--	--	--	--	--	--	--	--	--	--	--	--	--	--	--	--	--



Korrutamine

--	--	--	--	--	--	--	--	--	--	--	--	--	--	--	--	--	--	--	--

Liitmine

--	--	--	--	--	--	--	--	--	--	--	--	--	--	--	--	--	--	--	--

186. Võrdle (<, >, =).

$5 \cdot 3 \dots 4 \cdot 6$

$2 \cdot 9 \dots 3 \cdot 6$

$5 \cdot 10 \dots 8 \cdot 6$

$4 \cdot 4 \dots 2 \cdot 6$

$4 \cdot 7 \dots 5 \cdot 6$

$4 \cdot 9 \dots 6 \cdot 6$

$5 \cdot 8 \dots 7 \cdot 6$

$2 \cdot 3 \dots 1 \cdot 6$

$5 \cdot 7 \dots 9 \cdot 6$

187. Lahenda ülesanne.



Ühes karbis on kuus pliiatsit. Mitu pliiatsit on neljas karbis? Seitsmes karbis? Kümnes karbis?

188. Lahenda ülesanne.

Kausis on kuus õuna. Pirne on kaks korda rohkem. Mitu pirni on kausis? Mitu puuvilja on kausis?



189. Lahenda ülesanne.

Luule-kogu maksab 6 eurot. Inglise-eesti sõna-raamat on viis korda kallim. Kui palju maksab sõnastik? Kui suur on raamatute hinna-vahe?



190. Lahenda ülesanne.



Aivar ostis kolm 6-eurost auto-mudelit.













Kui palju sai poiss raha tagasi, kui ta maksis



20-eurose raha-tähega. Missugused mündid võis müüja Aivarile anda?

191. Arvuta.

				
$6 \cdot 1 =$ $1 \cdot 6 =$	$6 \cdot 2 =$ $2 \cdot 6 =$	$6 \cdot 3 =$ $3 \cdot 6 =$	$6 \cdot 4 =$ $4 \cdot 6 =$	$6 \cdot 5 =$ $5 \cdot 6 =$

				
$6 \cdot 6 =$ $6 \cdot 6 =$	$6 \cdot 7 =$ $7 \cdot 6 =$	$6 \cdot 8 =$ $8 \cdot 6 =$	$6 \cdot 9 =$ $9 \cdot 6 =$	$6 \cdot 10 =$ $10 \cdot 6 =$

192. Täida tabel.

Tegur	6	6	6	6	6	6	6	6	6	6
Tegur	1	2	3	4	5	6	7	8	9	10
Korrutis										

193. Kirjuta ja tähista arvud, mis on saadud arvu 6 korrutamisel.

