

ARVU 15 KÜMNENDKOOSTIS

156. Vasta küsimustele. Täida lüngad.



Mitu last on pildil?





Mitu last kelgutab?

Mitu last suusatab?


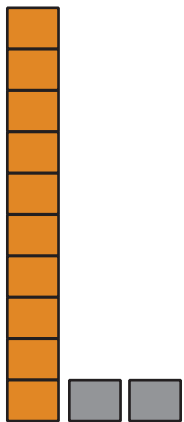
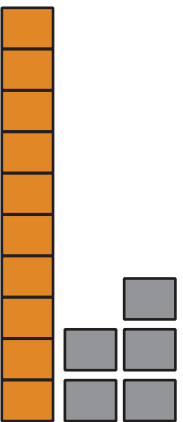


15 on ja

10 ja on 15.







157. Kirjuta pildi järgi arvud.

 K Ü <table border="1"><tr><td></td><td></td></tr><tr><td></td><td></td></tr></table> K Ü <table border="1"><tr><td></td><td></td></tr><tr><td></td><td></td></tr></table> K Ü <table border="1"><tr><td></td><td></td></tr><tr><td></td><td></td></tr></table>													 K Ü <table border="1"><tr><td></td><td></td></tr><tr><td></td><td></td></tr></table> K Ü <table border="1"><tr><td></td><td></td></tr><tr><td></td><td></td></tr></table> K Ü <table border="1"><tr><td></td><td></td></tr><tr><td></td><td></td></tr></table>												
 K Ü <table border="1"><tr><td></td><td></td></tr><tr><td></td><td></td></tr></table> K Ü <table border="1"><tr><td></td><td></td></tr><tr><td></td><td></td></tr></table> K Ü <table border="1"><tr><td></td><td></td></tr><tr><td></td><td></td></tr></table>													 K Ü <table border="1"><tr><td></td><td></td></tr><tr><td></td><td></td></tr></table> K Ü <table border="1"><tr><td></td><td></td></tr><tr><td></td><td></td></tr></table> K Ü <table border="1"><tr><td></td><td></td></tr><tr><td></td><td></td></tr></table>												


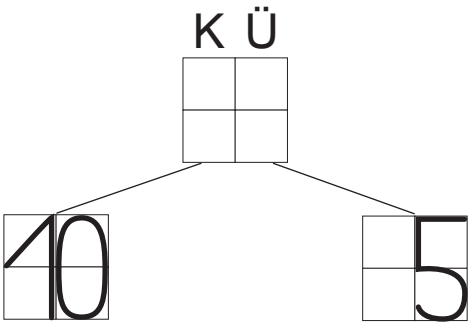

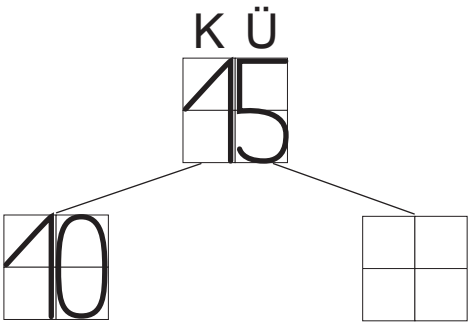
158. Mis arv on pildil? Kirjuta arv kümneline ja ühelised.

 K Ü <table border="1"><tr><td></td><td></td></tr><tr><td></td><td></td></tr></table>					 K Ü <table border="1"><tr><td></td><td></td></tr><tr><td></td><td></td></tr></table>					 K Ü <table border="1"><tr><td></td><td></td></tr><tr><td></td><td></td></tr></table>					 K Ü <table border="1"><tr><td></td><td></td></tr><tr><td></td><td></td></tr></table>					 K Ü <table border="1"><tr><td></td><td></td></tr><tr><td></td><td></td></tr></table>				
<table border="1"><tr><td></td><td></td></tr><tr><td></td><td></td></tr></table>					<table border="1"><tr><td></td><td></td></tr><tr><td></td><td></td></tr></table>					<table border="1"><tr><td></td><td></td></tr><tr><td></td><td></td></tr></table>					<table border="1"><tr><td></td><td></td></tr><tr><td></td><td></td></tr></table>					<table border="1"><tr><td></td><td></td></tr><tr><td></td><td></td></tr></table>				

159. Värvi nõutud arv. Täida lüngad.

<div></div>	<div></div>
<div><div></div><div></div></div>	<div><div></div><div></div></div>
<div>..... K Ü</div>	<div>..... K Ü</div>
<div></div>	<div></div>
<div><div></div><div></div></div>	<div><div></div><div></div></div>
<div>..... K Ü</div>	<div>..... K Ü</div>
<div></div>	<div></div>
<div><div></div><div></div></div>	<div><div></div><div></div></div>
<div>..... K Ü</div>	<div>..... K Ü</div>

160. Kirjuta arvu asendajad. Räägi.



161. Kirjuta arvu kümneline ja ühelised.

11 on $\overset{\text{K}}{\boxed{}}$ ja $\overset{\text{Ü}}{\boxed{}}$

10 on $\overset{\text{K}}{\boxed{}}$ ja $\overset{\text{Ü}}{\boxed{}}$

2 on $\overset{\text{K}}{\boxed{}}$ ja $\overset{\text{Ü}}{\boxed{}}$

15 on $\overset{\text{K}}{\boxed{}}$ ja $\overset{\text{Ü}}{\boxed{}}$

14 on $\overset{\text{K}}{\boxed{}}$ ja $\overset{\text{Ü}}{\boxed{}}$

9 on $\overset{\text{K}}{\boxed{}}$ ja $\overset{\text{Ü}}{\boxed{}}$

162. Nimeta ja kirjuta saadud arv.

1 kümneline ja 3 ühelist

1 kümneline ja 1 üheline

0 kümnelist ja 5 ühelist

1 kümneline ja 5 ühelist

1 kümneline ja 4 ühelist

1 kümneline ja 2 ühelist

1 kümneline ja 0 ühelist

0 kümnelist ja 4 ühelist

kümme	viis-teist	neli	kaks-teist
viis	kolm-teist	üks-teist	neli-teist