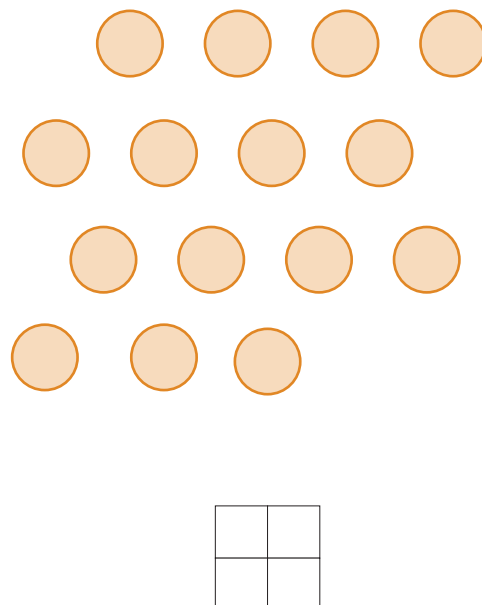

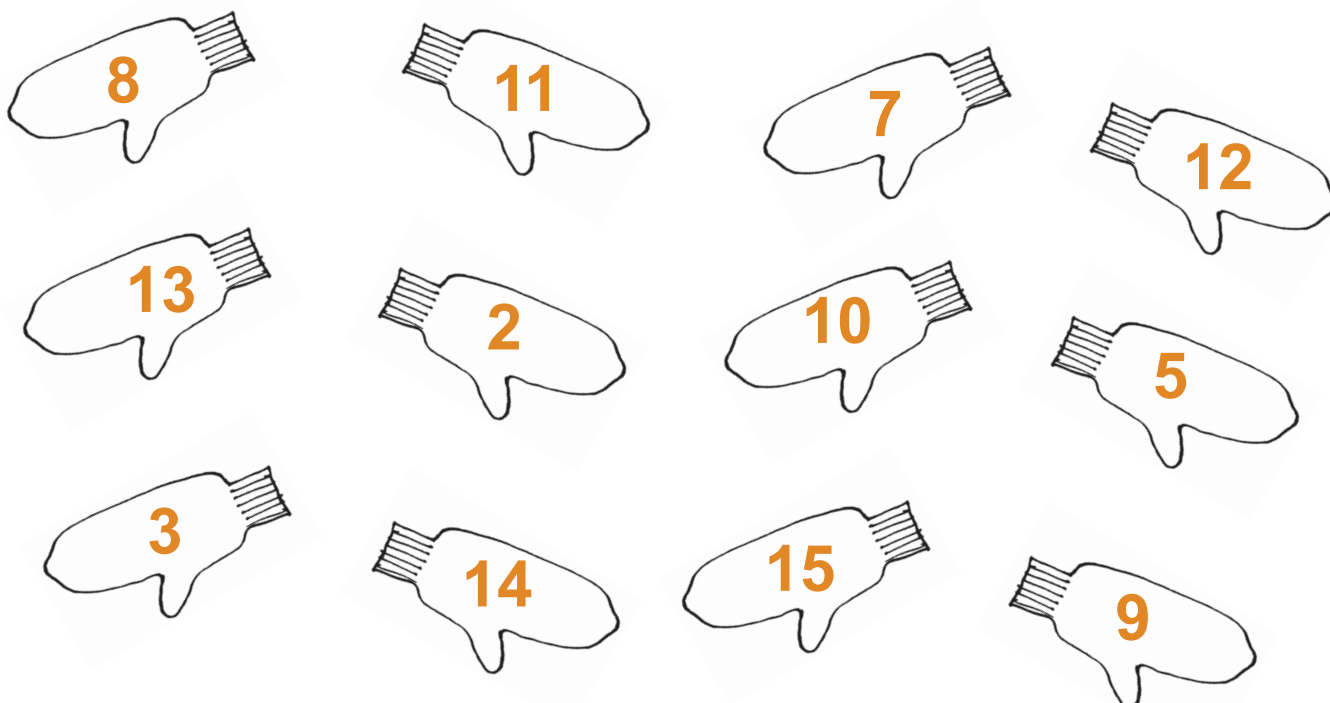


VÕRDLEMINE 15 PIIRES

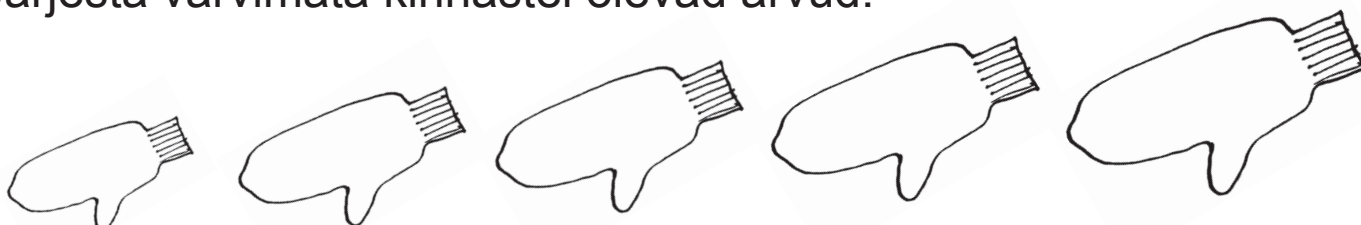
163. Loenda. Värvvi suurem hulk.



164. Värvvi kinnas, kui arv on 10-st väiksem.



Järjesta värvvima kinnastel olevad arvud.



165. Loenda. Kirjuta. Võrdle (>, <, =).

☼

☼

☼

☼

☼

☼

☼

☼

☼

☼

☼

☼

☼

☼

☼

☼

☼

☼

☼

☼

☼

☼

☼

☼

☼

☼

☼

☼

★

★

★

★

★

★

★

★

★

★

★

★

★

★

★

★

★

★

★

★

★

★

★

★

★

166. Võrdle (>, <, =).

■

■

■

■

■

■

■

■

■

■

■

■

■

■

■

■

■

■

■

■

■

■

■

■

■

■

■

■

■

■

■

■

■

■

■

■

■

■

■

■

■

■

■

■

■

■

■

■

■

■

■

■

■

■

■

■

■

■

■

■

■

■

■

■

■

■

■

■

■

■

■

■

■

■

■

■

■

■

■

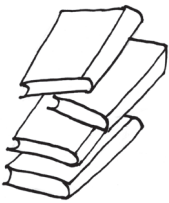







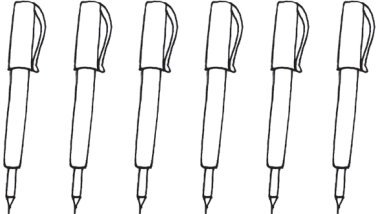
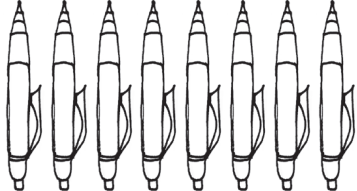
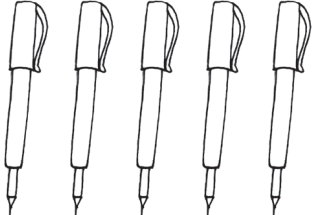

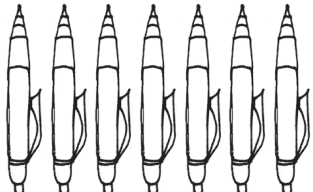

■

■











■

■

167. Loenda. Kirjuta. Võrdle (>, <, =).

Võrdle (>, <, =).

Võrdle hulki. Ühenda joonega.



on vähem, kui ...



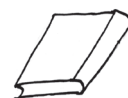
on vähem, kui ...



on rohkem, kui ...



on rohkem, kui ...



168. Võrdle (>, <, =).

$12 \square 10$

$6 \square 15$

$11 \square 11$

$8 \square 13$

$12 \square 11$

$7 \square 14$

$15 \square 14$

$10 \square 9$

$12 \square 15$

169. Vali lünka sobiv arv.

$10 > \square$



$14 < \square$



$10 < \square$

15

5

$14 > \square$

15

10

170. Kirjuta sobivad arvud.

$12 > \square$

$10 < \square$

$15 = \square$

$11 < \square$

$3 > \square$

$14 < \square$

$8 < \square$

$15 > \square$

$8 > \square$

$\square > 10$

$\square < 12$

$\square > 7$

$\square < 15$

$\square > 5$

$\square = 14$

$\square = 11$

$\square < 13$

$\square > 9$